

Free Worksheets

Ten Things Your Child Should Know

Addition: Sums up to 10



Danita Smith

BLACK and Education 
Uplifting our children and communities

Copyright © 2022 Danita Smith, Red and Black Ink, LLC

Ten Things
Your Child
Should Know
about
Reading, Writing,
and Math

1st Grade

Danita Smith

Explanation

Sums Up To 10


What is Addition?

Addition is really just adding more to what you already have. Think about ice cream.



If you imagine that you have one ice cream cone and you get one more, then you will have 2 ice cream cones.

Use what you know about counting and adding and complete the worksheets that follow.





Sums up to 10 - Worksheet #1

$$\begin{array}{r} + \\ \hline 5 \end{array}$$

$$\begin{array}{r} | \\ + 4 \\ \hline \end{array}$$

$$\begin{array}{r} | \\ + 7 \\ \hline \end{array}$$

$$\begin{array}{r} | \\ + 1 \\ \hline \end{array}$$

$$\begin{array}{r} | \\ + 8 \\ \hline \end{array}$$

$$\begin{array}{r} | \\ + 4 \\ \hline \end{array}$$

$$\begin{array}{r} | \\ + 3 \\ \hline \end{array}$$

$$\begin{array}{r} | \\ + 6 \\ \hline \end{array}$$

$$\begin{array}{r} | \\ + 2 \\ \hline \end{array}$$

$$\begin{array}{r} | \\ + 5 \\ \hline \end{array}$$

$$\begin{array}{r} | \\ + 9 \\ \hline \end{array}$$

$$\begin{array}{r} | \\ + 0 \\ \hline \end{array}$$

$$\begin{array}{r} | \\ + 6 \\ \hline \end{array}$$

Sums up to 10 - Worksheet #2

$$\begin{array}{r} 2 \\ + 3 \\ \hline \end{array}$$

$$\begin{array}{r} 2 \\ + 4 \\ \hline \end{array}$$

$$\begin{array}{r} 2 \\ + 1 \\ \hline \end{array}$$

$$\begin{array}{r} 2 \\ + 5 \\ \hline \end{array}$$

$$\begin{array}{r} 2 \\ + 2 \\ \hline \end{array}$$

$$\begin{array}{r} 2 \\ + 0 \\ \hline \end{array}$$

$$\begin{array}{r} 2 \\ + 6 \\ \hline \end{array}$$

$$\begin{array}{r} 2 \\ + 7 \\ \hline \end{array}$$

$$\begin{array}{r} 2 \\ + 8 \\ \hline \end{array}$$

$$\begin{array}{r} 2 \\ + 5 \\ \hline \end{array}$$

$$\begin{array}{r} 2 \\ + 3 \\ \hline \end{array}$$

$$\begin{array}{r} 2 \\ + 6 \\ \hline \end{array}$$

Sums up to 10 - Worksheet #3

$$\begin{array}{r} 3 \\ + 3 \\ \hline \end{array}$$

$$\begin{array}{r} 3 \\ + 4 \\ \hline \end{array}$$

$$\begin{array}{r} 3 \\ + 1 \\ \hline \end{array}$$

$$\begin{array}{r} 3 \\ + 6 \\ \hline \end{array}$$

$$\begin{array}{r} 3 \\ + 2 \\ \hline \end{array}$$

$$\begin{array}{r} 3 \\ + 0 \\ \hline \end{array}$$

$$\begin{array}{r} 3 \\ + 6 \\ \hline \end{array}$$

$$\begin{array}{r} 3 \\ + 5 \\ \hline \end{array}$$

$$\begin{array}{r} 3 \\ + 7 \\ \hline \end{array}$$

$$\begin{array}{r} 3 \\ + 5 \\ \hline \end{array}$$

$$\begin{array}{r} 3 \\ + 3 \\ \hline \end{array}$$

$$\begin{array}{r} 3 \\ + 6 \\ \hline \end{array}$$

Sums up to 10 - Worksheet #4

$$\begin{array}{r} 4 \\ + 3 \\ \hline \end{array}$$

$$\begin{array}{r} 4 \\ + 4 \\ \hline \end{array}$$

$$\begin{array}{r} 4 \\ + 1 \\ \hline \end{array}$$

$$\begin{array}{r} 4 \\ + 3 \\ \hline \end{array}$$

$$\begin{array}{r} 4 \\ + 2 \\ \hline \end{array}$$

$$\begin{array}{r} 4 \\ + 0 \\ \hline \end{array}$$

$$\begin{array}{r} 4 \\ + 6 \\ \hline \end{array}$$

$$\begin{array}{r} 4 \\ + 3 \\ \hline \end{array}$$

$$\begin{array}{r} 4 \\ + 5 \\ \hline \end{array}$$

$$\begin{array}{r} 4 \\ + 5 \\ \hline \end{array}$$

$$\begin{array}{r} 4 \\ + 4 \\ \hline \end{array}$$

$$\begin{array}{r} 4 \\ + 6 \\ \hline \end{array}$$

Sums up to 10 - Worksheet #5

$$\begin{array}{r} 5 \\ + 3 \\ \hline \end{array}$$

$$\begin{array}{r} 5 \\ + 4 \\ \hline \end{array}$$

$$\begin{array}{r} 5 \\ + 1 \\ \hline \end{array}$$

$$\begin{array}{r} 5 \\ + 5 \\ \hline \end{array}$$

$$\begin{array}{r} 5 \\ + 2 \\ \hline \end{array}$$

$$\begin{array}{r} 5 \\ + 0 \\ \hline \end{array}$$

$$\begin{array}{r} 5 \\ + 1 \\ \hline \end{array}$$

$$\begin{array}{r} 5 \\ + 3 \\ \hline \end{array}$$

$$\begin{array}{r} 5 \\ + 5 \\ \hline \end{array}$$

$$\begin{array}{r} 5 \\ + 2 \\ \hline \end{array}$$

$$\begin{array}{r} 5 \\ + 4 \\ \hline \end{array}$$

$$\begin{array}{r} 5 \\ + 3 \\ \hline \end{array}$$

Sums up to 10 - Worksheet #6

$$\begin{array}{r} 6 \\ + 3 \\ \hline \end{array}$$

$$\begin{array}{r} 6 \\ + 4 \\ \hline \end{array}$$

$$\begin{array}{r} 6 \\ + 1 \\ \hline \end{array}$$

$$\begin{array}{r} 6 \\ + 4 \\ \hline \end{array}$$

$$\begin{array}{r} 6 \\ + 2 \\ \hline \end{array}$$

$$\begin{array}{r} 6 \\ + 0 \\ \hline \end{array}$$

$$\begin{array}{r} 7 \\ + 3 \\ \hline \end{array}$$

$$\begin{array}{r} 7 \\ + 1 \\ \hline \end{array}$$

$$\begin{array}{r} 7 \\ + 0 \\ \hline \end{array}$$

$$\begin{array}{r} 7 \\ + 2 \\ \hline \end{array}$$

$$\begin{array}{r} 7 \\ + 1 \\ \hline \end{array}$$

$$\begin{array}{r} 7 \\ + 3 \\ \hline \end{array}$$


Explanation

Word Problems

Word Problems

Let's imagine you are going to the grocery store with your mom or dad. There are several things you have to get, but you will need to help with some addition in order for you to get the right things.

1. There are two apples in your cart, but your mom tells you to go get three more. How many apples do you now have in total?



Explanation


Sums Up To 10

Word Problems



2. There are three shopping carts in a line outside of the store. Four more people come and put their shopping carts in the line. How many shopping carts are there in the line?


3. Four pieces of bread fall onto the floor. There were already six pieces of bread on the floor. How many pieces of bread are on the floor?



Explanation

Sums Up To 10

Word Problems



4. Two cartons of milk are left on the shelf, but you find 4 more behind the orange juice. How many cartons of milk are there?

5. You convince your mom to buy you one donut for being great in school, but she decides to buy you 4 more donuts. How many donuts did your mom buy?



Sums up to 10 - Worksheet #7

$$\begin{array}{r} 8 \\ + 2 \\ \hline \end{array}$$

$$\begin{array}{r} 8 \\ + 1 \\ \hline \end{array}$$

$$\begin{array}{r} 8 \\ + 0 \\ \hline \end{array}$$

$$\begin{array}{r} 9 \\ + 1 \\ \hline \end{array}$$

$$\begin{array}{r} 9 \\ + 0 \\ \hline \end{array}$$

$$\begin{array}{r} 10 \\ + 0 \\ \hline \end{array}$$

$$\begin{array}{r} 9 \\ + 0 \\ \hline \end{array}$$

$$\begin{array}{r} 8 \\ + 0 \\ \hline \end{array}$$

$$\begin{array}{r} 8 \\ + 2 \\ \hline \end{array}$$

$$\begin{array}{r} 10 \\ + 0 \\ \hline \end{array}$$

$$\begin{array}{r} 9 \\ + 1 \\ \hline \end{array}$$

$$\begin{array}{r} 9 \\ + 0 \\ \hline \end{array}$$